



Name :  
Date :

**English**  
**Assignment 1**  
**Grade 3**  
**The lost Aliens**

Section :  
Roll No :

Fill the table.

Name of the Alien	His Power	The Place where he landed
googly eyed alien 	transform	
	teleporting	
Big teeth Alien 		Africa
	reads mind	
		The great wall of the China



Fill in the banks with suitable interjection.

(yippee, good, nice, oh, oops)

1. \_\_\_\_\_, that was a sight none would want to miss!
2. \_\_\_\_\_, the funny character!
3. " \_\_\_\_\_, computer found an error !"
4. \_\_\_\_\_! You came first in the class.
5. \_\_\_\_\_! Let us move on to the next chapter.

Observe the pictures and choose the appropriate interjection from the given set of hints.

1 hurray	2 awesome	3 great	4 wow	5 ugh	6 hmm	7 huh
8 oh really	9 congratulations	10 good	11 whew	12 nice		



Answer the following.

1. Where did the Big Teeth Alien land? What did he see?
2. How many aliens are mentioned in the story?

Name :

Date :

**English**  
**Assignment 2**


**Grade 3**

Section :

Roll No :

**My Shadow**

Write the suitable similes for the following pictures.



Read the following sentences and Note down the conjunctions.

1. You can either stay here or leave.
2. She did not like to eat carrot but she was forced by her mother to eat it.
3. I have a little shadow that goes in and out with me.
4. Pradeep doesn't eat Biryani nor does he eat cake.
5. The traffic signal changed to red so I had to wait.

Fill the blanks with suitable conjunctions.

1. I go to temple every Sunday \_\_\_\_\_ I love to pray god.
2. Honey \_\_\_\_\_ Anu are good friends.
3. Mahesh is not hard working \_\_\_\_\_ is he punctual.
4. You can have an apple \_\_\_\_\_ a banana after lunch.
5. He exercises a lot \_\_\_\_\_ he is fat.
6. The movie is entertaining \_\_\_\_\_ it is too long.

Answer the following.

1. What is the funniest thing about the shadow?
2. What does the poet say about the nature of a shadow?
3. How is the growth of a Shadow described in the poem? Explain it in your own words.

Write the meanings of the following.

1. Notion
2. Coward
3. Ought to
4. errant

Name :

Date :

**English**  
**Assignment 3**

**Grade 3**

Section :

Roll No :

**The Pumpkin Boy**

Identify the word that you think is wrong. Rewrite the sentence with the correct verb form.

Birds flys in the sky.

1



We plays tennis in the evening.

2



It usually rain in August.

3



She don't want chocolates.

4



Plumber fixs taps and umps.

5



They don't likes chicken.

6



Follow the given instructions and frame the sentences.

1. Write a sentence in simple past by using the verb 'swim'.
2. Change and Rewrite the above sentence into Past continuous tense.
3. Write a present continuous tense sentence.
4. Write a past continuous tense sentence using the word 'during' in it.
5. Write a future tense sentence.

Write the past tense form of the given verbs.

a	grow	b	leave	c	go
d	get	e	wake	f	ride
g	speak	h	walk	i	swing
j	press	k	feel	l	dig

Fill in the blanks by recalling the story 'The Pumpkin Boy'.

1. The old man asked \_\_\_\_\_ to clear the \_\_\_\_\_ patch.
2. The old man was very \_\_\_\_\_ and wicked.
3. Pumpkin ate up a \_\_\_\_\_ of \_\_\_\_\_ as soon as he was born.
4. Pumpkin watched the rice like a \_\_\_\_\_.
5. The name of the old man's youngest daughter is \_\_\_\_\_.

Answer the following.

1. Why did Pumpkin start looking for a job?
2. What happened to Munni when she went to the forest?
3. What did Pumpkin boy tell Munni when she took food for him?

Name :

Date :

**English**  
**Assignment 4**

**Grade 3**

Section :

Roll No :

**Be Kind**

Note down noun and verb in the given sentences.

1. They go to school.

Noun \_\_\_\_\_

Verb \_\_\_\_\_

5. He paints on the wall.

Noun \_\_\_\_\_

Verb \_\_\_\_\_

2. She leaves her food here.

Noun \_\_\_\_\_

Verb \_\_\_\_\_

6. I eat mangoes a lot in every summer.

Noun \_\_\_\_\_

Verb \_\_\_\_\_

3. My mom shouts at me.

Noun \_\_\_\_\_

Verb \_\_\_\_\_

7. Rahul laughed at me.

Noun \_\_\_\_\_

Verb \_\_\_\_\_

4. We draw a picture in school.

Noun \_\_\_\_\_

Verb \_\_\_\_\_

8. Anil likes it very much.

Noun \_\_\_\_\_

Verb \_\_\_\_\_

Rewrite the sentences by replacing the nouns with suitable pronouns.

1. The light fly glows in the dark.
2. Kiran and I are drinking milk.
3. Aansh is kicking the ball.
4. Anil and Ajay are cleaning the house.
5. The birds are flying in the sky.
6. My sister bought me a new toy.

## Which parts of speech does the highlighted word represented?

1



noun

verb

adjective

I saw many **books** at the market place yesterday.

2



adverb

adjective

preposition

She **quickly** ate her dinner.

3



verb

conjunction

adjective

He must be very **strong** to break that strong brick!

4



preposition

adverb

noun

David solved the question **on** a piece of paper.

5



conjunction

interjection

adverb

**Wow!** Those plans look very complicated.

6



pronoun

adjective

verb

Natasha is cheering for **her** team!

7



pronoun

verb

preposition

Anil is **practicing** for his concert tomorrow.

8



adverb

conjunction

adjective

The boy is tired **yet** he is carrying the heavy backpack.

## Answer the following.

1. Define 'pronoun' and give any two examples of your choice.
2. Define 'noun' and give any two examples of your choice.
3. Define 'verb' and give any two examples of your choice.
4. Define 'adjective' and give any two examples of your choice.
5. Define 'adverb' and give any two examples of your choice.
6. Define 'conjunction' and give any two examples of your choice.
7. Define 'preposition' and give any two examples of your choice.
8. Define 'interjection' and give any two examples of your choice.

## Answer the following question.

1. How do you help your parents?
2. What is kindness? How does being kind help?
3. What can bring a happy glow to anybody's face?

Name :

Date :

**English**  
**Assignment 5**

**Grade 3**

Section :

Roll No :

**Acorn and Oak**

Rewrite the sentences by changing the adjectives into adverbs.

1



Ms. Riya is a wonderful dancer.

2



Ravi is a fast runner.

3



They are responsible workers.

4



Roshan is a late comer to school.

5



Varun is nice singer.

Now add a question tag to the sentences given.

1. This watermelon isn't sweet.
2. She can speak English fluently.
3. I'm a dancer.
4. They aren't working properly.
5. She has completed her work.

Complete the sentences using the correct forms of the words given in the brackets.

1. They completed their work \_\_\_\_\_ (perfect).
2. Mokshit is a \_\_\_\_\_ (naughty) boy.
3. Hari is a (good) \_\_\_\_\_ dancer. He dances \_\_\_\_\_ (graceful) .
4. The dog barks \_\_\_\_\_ (loud).
5. It's a \_\_\_\_\_ (horrible) day today. I am losing \_\_\_\_\_ (horrible) in all matches.

Answer the following question.

1. What did the oak tree say to acorn?
2. Why was the acorn sad?
3. Describe an acorn in your own words.

Name :

Date :



**EVS**  
**Assignment 1**

**Grade 3**

Section :

Roll No :

Name the following means of communication and its type of communication.



Fill in the blanks.

1. Verbal messages are \_\_\_\_\_ and \_\_\_\_\_.
2. In \_\_\_\_\_ communication, information is transferred in one direction only.
3. In one-way communication information is transferred from \_\_\_\_\_ to \_\_\_\_\_.
4. Telephone was invented by \_\_\_\_\_.
5. \_\_\_\_\_ is the fastest means of communication.

Define the following.



**Personal communication**



**Mass communication**



**Telecommunication**



**Verbal communication**



**Non-verbal communication**

Answer the following.

1. How are smart phones different from mobile phones?
2. How are a newspaper, a radio and a television different from each other?
3. What are the means of personal communication?
4. What is the need of communication?
5. What is meant by 'means of communication'?

Identify the following means of personal communication or mass communication.



Name :  
Date :

**EVS**  
**Assignment 2**  
**Grade 3**  
**Traditional skills of India**

Section :  
Roll No :

Write the name of the material used in the handicrafts given below.



Making handloom fabrics from cotton is a fascinating journey. Note down the numbers in the correct order of the process.



## How does a potter make clay pots?

---

---

---

---

---

---

---

---

### Answer the following.

1. Why are Indian handicrafts well known throughout the world?
2. Why are some traditional Indian crafts vanishing?
3. Write a short note on toy festival (Bommala Kolu).
4. What is a handloom?
5. Mention the exclusive handicrafts produced from these places.

Place	Famous for
Kashmir	
Rajasthan	
Kancheepuram	
North-East	
Karnataka	
Pochampalli	

Name :

Date :

**EVS**  
**Assignment 3**

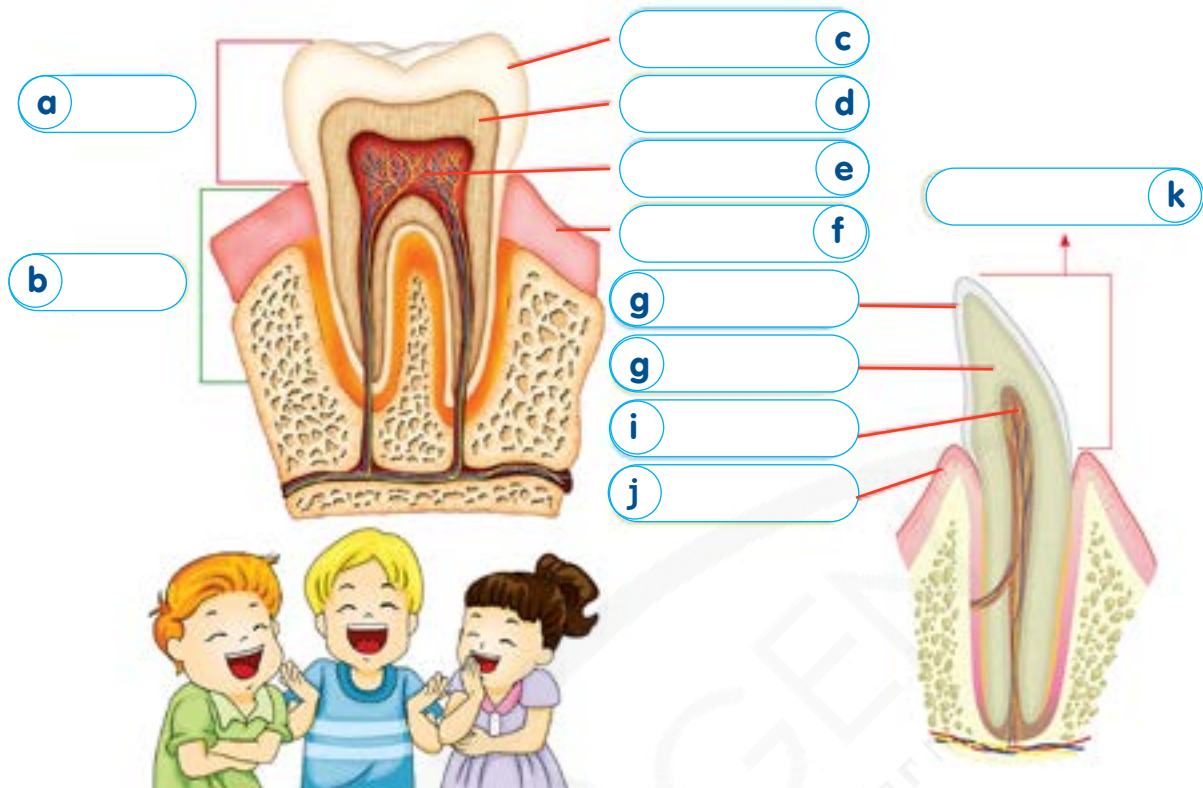
**Grade 3**

Section :

Roll No :

**Our teeth**

Label the parts of the given teeth.

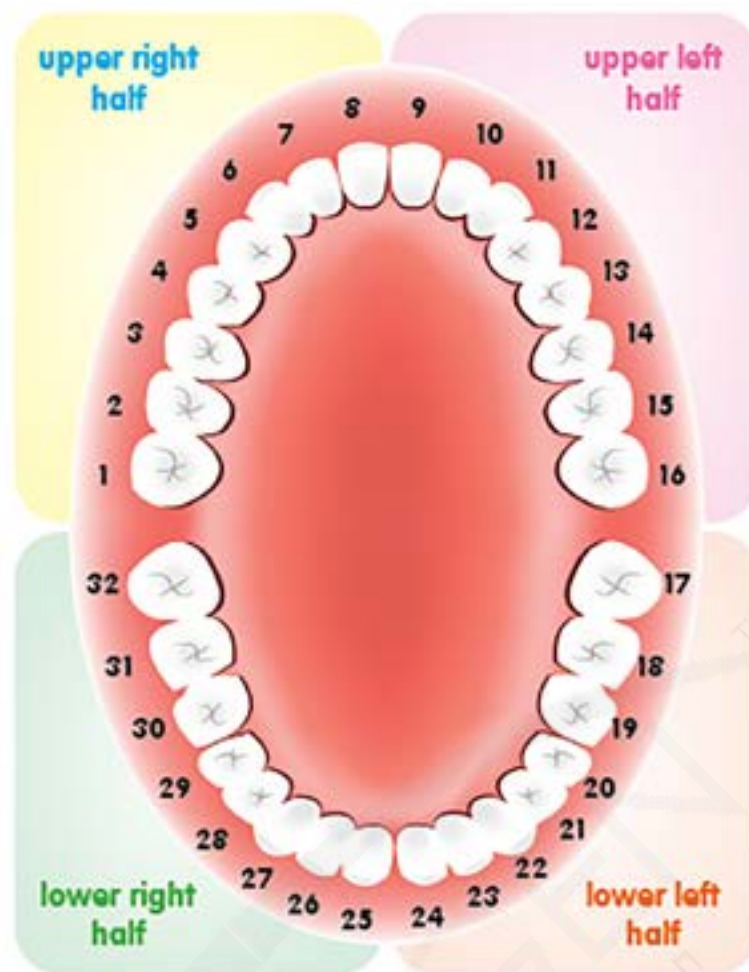


1. The \_\_\_\_\_ protects the internal parts of the tooth.
2. We should consult a dentist every \_\_\_\_\_ months for our \_\_\_\_\_ hygiene.
3. The visible part of a tooth in our mouth is \_\_\_\_\_.
4. The traces of food particles will be decayed by the growth of \_\_\_\_\_.

**Answer the following**

1. Why do we have different type of teeth? What are they?
2. How many sets of teeth do we get in our life time? What are they called?
3. Where are the teeth located in our body? How are they useful to us?

Each permanent tooth in our mouth (oral cavity) is numbered. Name the teeth.



upper right half	
Teeth Number	Name of the Tooth
1	molar
2	
3	
4	
5	
6	
7	
8	

upper left half	
Teeth Number	Name of the Tooth
9	
10	
11	
12	
13	premolar
14	
15	
16	

lower left half	
Teeth Number	Name of the Tooth
17	
18	
19	
20	
21	
22	
23	
24	incisor

lower right half	
Teeth Number	Name of the Tooth
25	
26	
27	canine
28	
29	
30	
31	
32	

Name :  
Date :

**EVS**  
**Assignment 4**  
**Grade 3**  
**Our Houses**

Section :  
Roll No :

Mention the different types of roofs and the materials used in them.



Picture	Type of Roof	Material Used
1		
2		
3		
4		
5		

Fill the blanks with the corresponding words.



ice      apartment      recreation      floating      earthquakes

Answer the following Questions.

- 1. What does domestic solid waste contain?
- 2. What is the proper way to use the dustbins?
- 3. Why do we need house?
- 4. Name any three special houses

Name the houses and Separate the temporary houses and permanent houses from the given.



Temporary houses	Permanent houses

Name :

Date :

**EVS**  
**Assignment 5**

**Grade 3**

Section :

Roll No :

**Transportation**

Name the means of transport and mode of transport for the given.

1



2



3



4



5



6



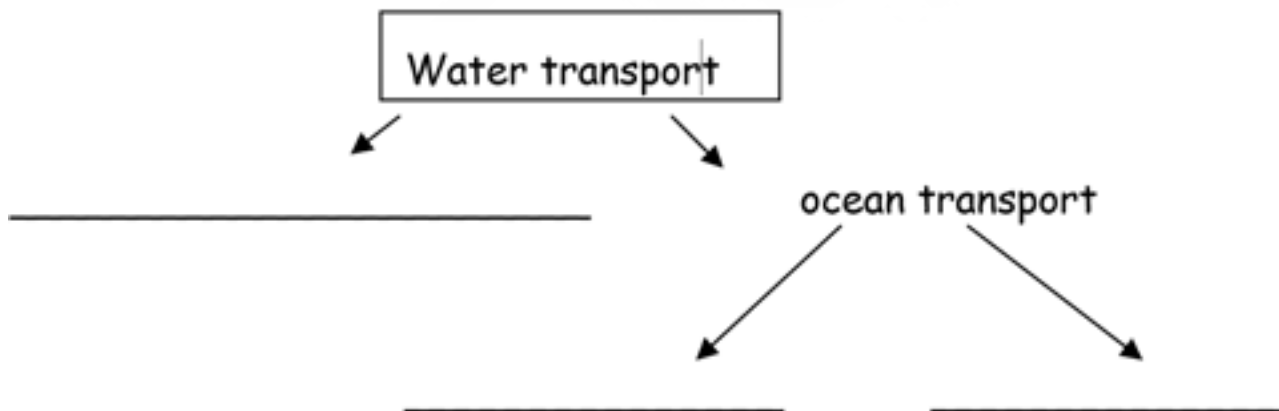
7



8









Complete the flow chart.



Answer the following

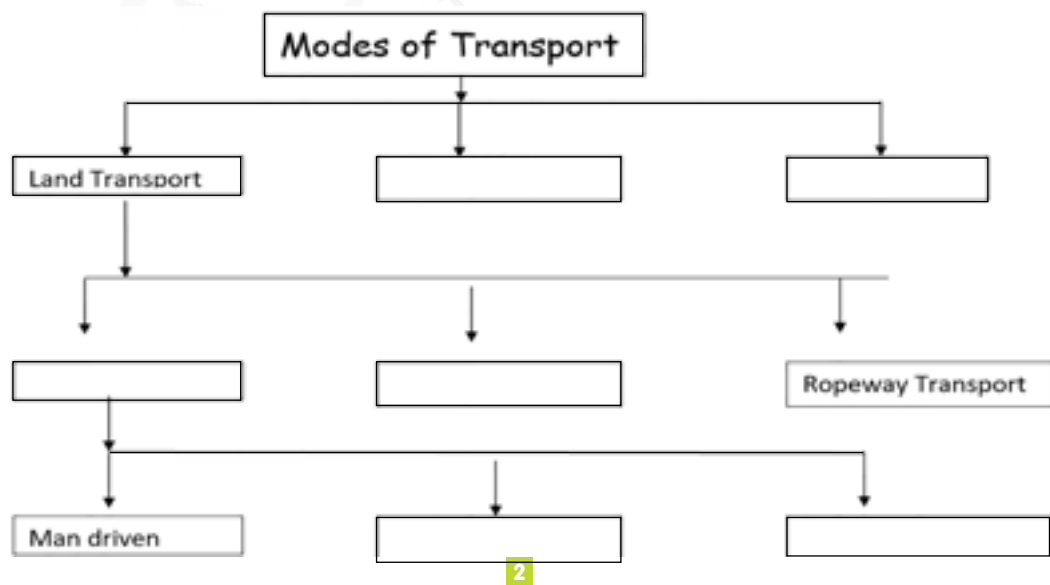
1. What is the importance of transportation in our daily life?
2. What is meant by transport?
3. How is public transport more advantageous than private transport?

Name the means of transport and identify whether it is man driven or animal driven or motor driven.



Complete the flow chart with the help of given clues.

Rail Transport    Animal Driven    Water Transport    Road Transport    Air Transport    Motor Driven



Name :

Date :



Mathematics  
Assignment 1

Grade 3

Section :

Roll No :


How much liquid  
should you pour out  
from each jug to drop  
down the water level  
to **500 ml**?



Measure the lengths of the following objects.



Measure the weights of the following objects.



Which container holds more? Write their name.



Answer the following.

1. There are two cows giving 3l 500ml and 5l 300ml of milk respectively. How much milk do the two cows give in all?
2. A shop keeper had an oil can with 8 l 630 ml of oil. He sold 3 l 90 ml of it. How much oil is left unsold?
3. A binder is 10 cm thick. How thick are 4 binders put together?
4. A box of books is 6 times heavier than a box of apples. The weight of the box of apples is 15 kg. Express the weight of the books box in kg.
5. A box consists of 5 pumpkins. The total weight of the box is 60000 g. Find out the weight of each pumpkin.

Fill in the blanks.

1. 2 litre = \_\_\_\_\_ ml
2. 500 ml = \_\_\_\_\_ ml + 200 ml
3. 1 l 100 ml = 800 ml + \_\_\_\_\_ ml
4. 3 l = \_\_\_\_\_ ml + 1800 ml

Name :

Date :

Mathematics  
Assignment 2


Grade 3

Section :

Roll No :

Time


Look at the clock and note down the time.



Draw clocks to show indicated times.



Observe the two clocks and note down the duration.



## Word problems

1. Sarat started reading a book at 4:20. He read the book for two hours. What time did he finish reading?

2. Riyansh 's school starts in the morning at 9:00. Riyansh's lunch break will be four hours after the given time. At what time is Riyansh's lunch break?

Write the given time in words.

7:00

1:20

3:15

6:53

5:45

Fill in the blanks.

1. The first day of the week is \_\_\_\_\_.
2. The last day of the week is \_\_\_\_\_.
3. \_\_\_\_\_ day comes after Tuesday.
4. Friday comes before \_\_\_\_\_ day.
5. The number of days in an ordinary year is \_\_\_\_\_.
6. How many days are there in January? \_\_\_\_\_.

Name :

Date :

Mathematics  
Assignment 3

Grade 3

Section :

Roll No :

Money

Convert **paise** into **rupee**.

4500p

1200p

7890p

3200p

8080p

Convert **rupees** into **paise**.

₹90

₹45

₹87

₹65

₹73

Put the correct comparison symbol (< or > or =) in each box

₹98 \_\_\_\_\_ ₹45

₹67 \_\_\_\_\_ ₹86

₹501 \_\_\_\_\_ ₹510

₹5435 \_\_\_\_\_ ₹5453

₹2367 \_\_\_\_\_ ₹7632

₹8500 \_\_\_\_\_ ₹8500

Arrange the following amounts in order from **smallest** to the **largest**.

₹6789

₹5436

₹5010

₹500

₹1200

Arrange the following amounts in order from **largest** to the **smallest**.

₹9021

₹1349

₹543

₹1242

₹1010

Answer the following.

1. If a pair of shirts costs ₹300, what is the cost of each shirt?
2. If 12 pens cost ₹180, what is the cost of each pen?
3. If 30 metres of ribbon costs ₹240, find the cost of 1 metre ribbon.
4. If 4 chairs cost ₹960, what is the cost of each chair?
5. If a book costs ₹90, what is the cost of 6 such books?

Word Problems.

1. If Swetha wanted to buy 4 samosas, 2 milk shakes and a French fries, how much would she have to pay? (samosa = 30, milkshake = 50, French fries = 20)
2. Vihar and his friends went to a movie. They bought 15 tickets. Each ticket's cost is ₹125. What is the total cost of tickets?
3. Ahish went to a mall with his family. He parked the car in the parking lot. The mall charges ₹20 per hour for car parking. The in time was registered as 11 a.m. and the out time as 5: 00 p.m. How much should he pay for car parking?

Add the following.

$$₹789 + ₹408$$

$$₹1406 + ₹9087$$

$$₹238 + ₹678 + ₹320$$

$$₹4090 + ₹5050 + ₹789$$

Subtract the following.

$$₹3125 - ₹2897$$

$$₹6780 - ₹1098$$

$$₹4576 - ₹1234$$

$$₹6900 - ₹5421$$

Multiply the following.

$$₹542 \times 9$$

$$₹675 \times 7$$

$$₹567 \times 12$$

$$₹563 \times 15$$

Name : \_\_\_\_\_  
Date : \_\_\_\_\_

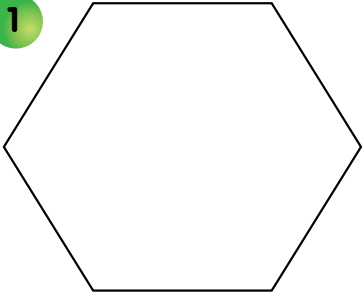
**Mathematics**  
**Assignment 4**  
**Fractions**

**Grade 3**

Section : \_\_\_\_\_  
Roll No : \_\_\_\_\_

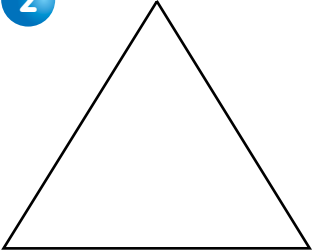
Observe the given fraction in each box and draw lines inside the shape accordingly. Also colour the shape appropriately.

1




$\frac{2}{6}$

2



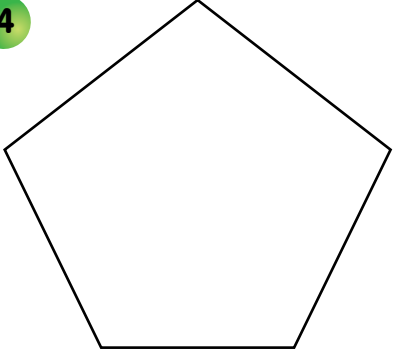
$\frac{1}{2}$

3




$\frac{3}{8}$

4




$\frac{4}{5}$

5



$\frac{1}{4}$

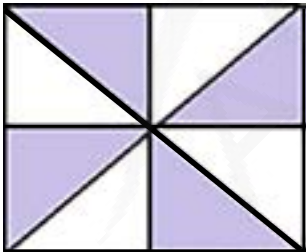
6




$\frac{2}{3}$

Write the fraction for unshaded parts of the following figures.


1



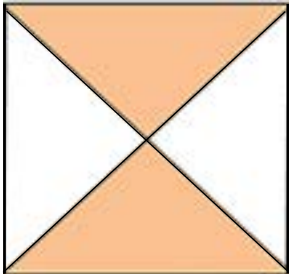
2









3



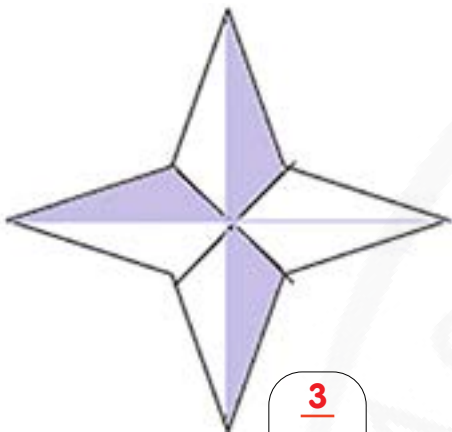
4



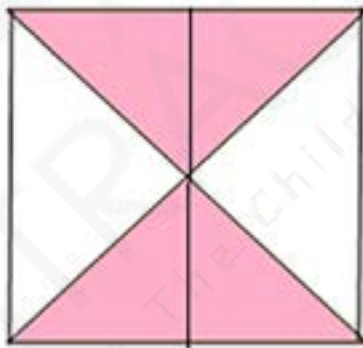
What fractions of the total objects are there in each group?



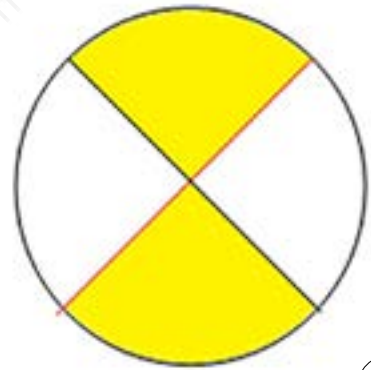
Write the missing numerator or denominator in each fraction by observing the shaded parts of each shape.



$\frac{3}{10}$



$\frac{4}{8}$



$\frac{2}{4}$

Answer the following problems.

1. There are five Sundays in the month of May, What fraction of the total days in the month do Sundays represent?

2. There are 30 houses in Varun's colony. 17 of them are having gardens. What fraction of the houses do not have gardens?

Name : \_\_\_\_\_

Date : \_\_\_\_\_

**Mathematics**  
**Assignment 5**

**Grade 3**

**Patterns**

Section : \_\_\_\_\_

Roll No : \_\_\_\_\_

Draw the next figure in the given pattern.

1				
2				
3				
4				

Write the missing numbers to complete the pattern.

6	12	_____	24	_____	36	_____	_____	54	_____
7	10	13	16	_____	22	_____	_____	31	_____
10000	9995	9990	_____	_____	9975	9970	9965	_____	_____
81	72	_____	54	_____	36	_____	18	9	_____

Complete the Pattern.

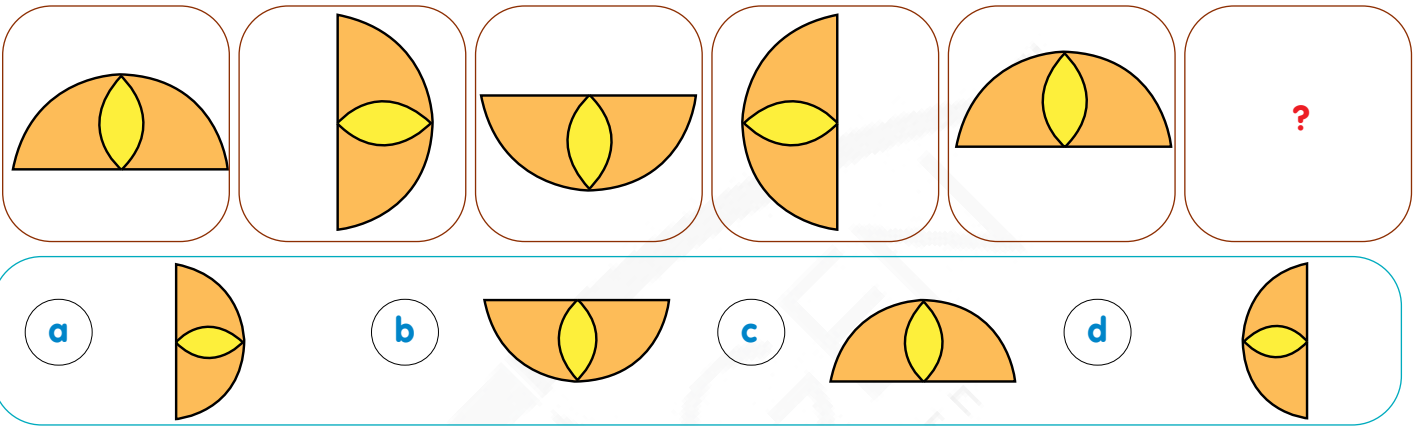
ZZB      XXD      VVF      \_\_\_\_\_      RRJ

112      PQR      223      PQR      \_\_\_\_\_

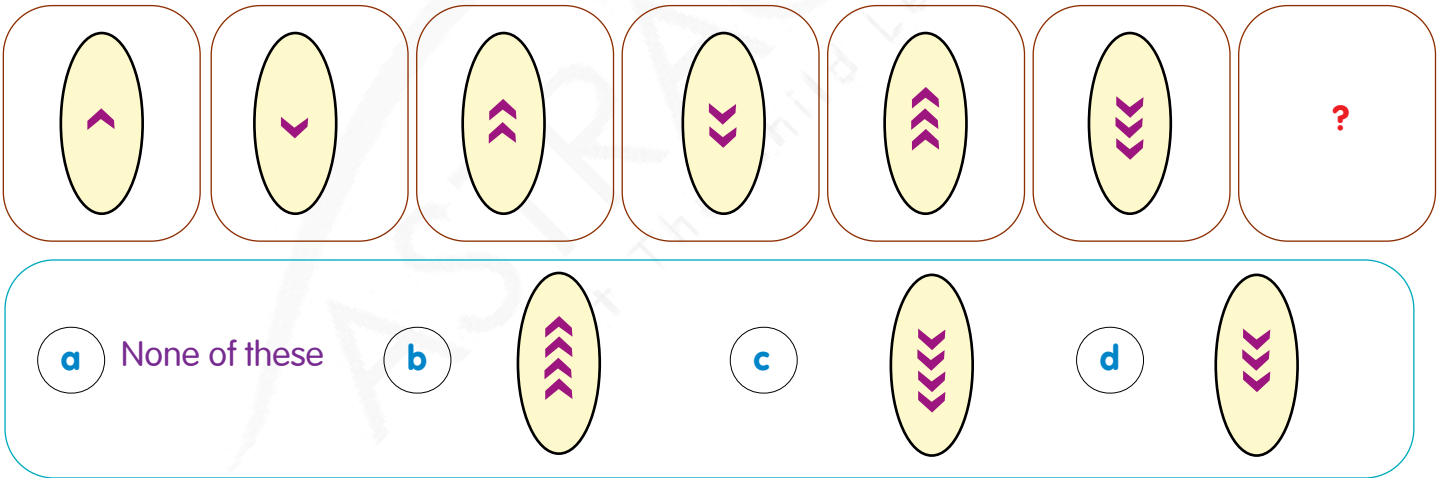
3A      9AB      27ABC      \_\_\_\_\_      243ABCDE

Choose the figure to complete the pattern.

1



2



3

