

Name :
Date :

English
Assignment 1
Grade 4
Clever Bunny Rabbit Fools Cutie Cow

Section :
Roll No :

Answer the following questions.

1. What did Bunny Rabbit actually want from Cutie Cow?

2. What did Cutie Cow do to trick Bunny Rabbit?

Read the below story and find out the adjectives.

Rapunzel was a beautiful princess with very long hair and blue eyes. She lived in a huge palace. One day, a wicked old woman kidnapped and trapped her in a tall castle within a dark jungle. Every day, the cunning old woman used to make the helpless girl work hard. An almighty prince once came to the dark jungle on a horse and found about the scary castle. He saved the lonely princess and took her back to palace. The happy king got his daughter married to the brave prince. Both the prince and princess went to a wonderful island and lived happily ever after.

Underline the adjectives and also write the type of adjective in the below given sentences.

1. This flower is more beautiful than that flower.
2. Give me some water to drink.
3. I don't have enough money to buy the shirt.
4. My father gave me three dollars.
5. The girl is wearing a long gown.
6. Every citizen has to follow the lockdown.
7. Which place are we going to?
8. I left my cute teddy bear at home.

Do the following.

1. Frame a sentence using a **Demonstrative Adjective**.

2. Write a sentence with an **Interrogative Adjective**

3. Make your own sentence with **Adjective of Quantity**.

4. Write a sentence using **Descriptive Adjective**.

List out any 9 adjectives of your choice.

Fill in the blanks with the appropriate adjectives.

1. Baking a cake requires _____ effort.
2. This restaurant has _____ food.
3. _____ is your favourite hill station?
4. My grandmother lives in a _____ house.
5. Eating _____ vegetables is good for our eyes.

Name :
Date :

English
Assignment 2
Grade 4
The Rainbow

Section :
Roll No :

Read the story given below and find out the conjunctions.

One day while returning from school, my friend Sahil asked me to compete with him in bicycle riding. Though I was not convinced completely, I nodded as he was requesting a lot. After reaching a point, we started the race. Sahil was too fast and gushed with his cycle. Before I could stop him, he flew as air. Suddenly, an auto rickshaw came from the other side and seeing that, Sahil got panicked and fell down. I got scared to the hell and didn't even realise how I ran towards him. I called his dad and waited until he came. We took Sahil to the nearby clinic. Sahil's parents warned him because he literally put his life at risk. Whenever I go by that route, I get scared.

Answer the following questions.

1. Which game did the poet relate to the rainbow?

2. What are your thoughts about the rainbow?

Write the meanings of the following.

- bob

amuse
- wink

trail

Underline the **subordinating conjunctions** in the below given sentences.

1. My father brings something for me whenever he goes on business trip.
2. I was watching T.V. while my mother was cooking food.
3. I don't know how I will reach the meeting on time.
4. My friend helps poor people wherever he finds them.
5. Even if my brother scores less marks, I will buy him the toy car.
6. Riya told me many times that she likes playing badminton.
7. Though my sister danced well, she missed the prize.
8. I skipped my lunch as I was not hungry.
9. If he is in trouble, he will surely call me.
10. My boss went off before I could talk to him.

Frame any three sentences using **subordinating conjunctions** of your choice.

Fill in the blanks with the appropriate **conjunctions**.

1. My daughter will come with me _____ she is at home.
2. I read novels _____ I get free time.
3. Federer won the prize _____ he played really well.
4. _____ she was not feeling well, she ate junk food.
5. The train left the station _____ I could catch it.

Name :

Date :

English
Assignment 3

Grade 4

Walking Fish

Section :

Roll No :

Underline / Write down the adverbs in the given story.

I nervously woke up that day as it was the day our results were going to be definitely announced. I remember when I was seriously ill and couldn't write the exams well. I found the test papers quite tough. I was very worried and was embarrassingly scolding myself for not preparing properly. I was badly praying, in fact helplessly begging God to get me passing marks. I stepped into the college campus shivering. I saw my friends and other classmates screaming loudly seeing their results. The whole scenario was fearfully breathtaking. I anxiously went to the noticeboard to check my results. I surprisingly got 60 percent of marks. I happily jumped and cheerfully let a sign of relief that I graduated successfully.

Answer the following questions.

1. Who is the leader of the fish tribe in the story?

2. Who helped the fish tribe to light the fire again?

Circle / Write down only adverbs in the below given sentences.

1. My friend furiously shouted at his younger brother.

2. The wolf fought fiercely to save her cubs.

3. She screamed happily on winning the lottery.

4. The books' shelf was clumsily set.

5. The gardener neatly cleaned the garden.

Complete the sentences using **adverbs** of your choice.

- 1. She passed the exam _____.
- 2. They walked _____ to catch the train.
- 3. _____ was the worst year of my life.
- 4. John answered the question _____.
- 5. We gave them a _____ tough match.
- 6. It was _____ windy that night.

Write a sentence using each **type** of **adverb**.

1. Adverb of Time -

2. Adverb of Place -

3. Adverb of Manner -

4. Adverb of Degree -

5. Adverb of Frequency -

Few **adverbs** are hidden in the grid. Find and note them down.

s	r	a	g	e	n	t	l	y	j	t	s
o	b	r	i	g	h	t	l	y	v	w	e
f	s	f	a	s	t	t	d	o	v	i	l
s	d	v	n	d	n	z	c	x	e	c	d
e	s	o	r	e	h	n	v	g	r	e	o
f	o	y	g	c	a	l	m	l	y	t	m
s	r	g	h	b	p	r	a	t	o	o	p
l	d	a	f	a	p	w	b	u	m	n	t
o	q	w	b	u	i	q	j	y	d	i	e
w	u	a	e	r	l	o	e	n	e	g	f
l	x	y	d	c	y	v	o	p	l	h	i
y	w	h	e	a	m	n	q	u	i	t	e

Name :

Date :

English
Assignment 4

Grade 4

Section :

Roll No :

Lines Written In March

Write meanings of the following.

twitter

valiantly

Answer the following questions.

1. Summarize the poem briefly in your own words.

2. Which season has just passed according to the poem?

Divide the given words into syllables..

difference

movement

phone

beyond

process

blood

technology

college

because

development

church

summer

organization

daughter

Choose the correct syllable breakage.

- 1 officer : ☐ a off-i-cer ☐ b of-fi-cer ☐ c offi-cer
- 2 decade : ☐ a dec-ade ☐ b de-ca-de ☐ c deca-de
- 3 size : ☐ a si-ze ☐ b size ☐ c siz-e
- 4 pressure : ☐ a press-ure ☐ b pres-sure ☐ c pre-ss-ure
- 5 box : ☐ a bo-x ☐ b b-ox ☐ c box
- 6 forward : ☐ a for-ward ☐ b for-w-ard ☐ c fo-rw-ard
- 7 allow : ☐ a all-ow ☐ b al-low ☐ c a-llow
- 8 animal : ☐ a an-i-mal ☐ b ani-mal ☐ c an-im-al

Complete the table of syllables. One is done for you.

	Word	Letters	No. of Syllables	Syllable Breakage
1	environment	11	4	en-vi-ron-ment
2	management			
3	character			
4	listen			
5	teach			
6	education			
7	second			
8	experience			
9	baby			
10	history			

Name :

Date :

English
Assignment 5

Grade 4

Section :

Roll No :

Good Samaritan

Answer the following questions.

1. What happened on a dark September morning?

2. Describe Vidya's monument.

Write the past tense form for the given words.

rise

put

tear

lick

fall

meet

swim

jump

cut

wake

keep

go

read

hide

draw

bring

Use the correct form of the given verbs to complete the sentences.

meet

speak

wait

eat

swim

go

1. Sheena _____ to market and bought a dozen apples.

2. My brother _____ in the pool every morning.

3. I like _____ pizzas on weekends.

4. Karan is _____ for the bus since an hour.

5. I _____ Rahul last Friday.

6. Your principal _____ to me over phone and discussed about your result.

Frame a **sentence** of each **tense** given below.

Present Perfect Tense

-

Past Perfect Tense

-

Future Perfect Tense

-

Present Perfect Continuous Tense

-

Past Perfect Continuous Tense

-

Complete the table of **tenses**.

Past Perfect	Past Perfect Continuous	Present Perfect	Present Perfect Continuous	Future Perfect Tense
		Rahul has planted a money plant in his garden.		
	He had been playing basketball for two hours.			
			She has been taking a dose of medicine for two weeks.	
Selena had performed extremely well at the concert.				
				I will have completed my work before 9 p.m.

Name :
Date :

EVS
Assignment 4
Grade 4
Our Cultural Heritage

Section :
Roll No :

Answer the following questions.

1. 'Atithi devo bhava' - what does it mean and reflect?

2. What is yoga?

3. What is culture?

Name any two national festivals.

Write about 'Ayurveda'.



Fill in the blanks.

1. Heritage is the past made _____.
2. Sushruta is known as the father of _____.
3. _____ is considered as the mother of all languages.
4. _____ is one of the greatest composers of Carnatic music.
5. _____ is the world's first university.

Unscramble the names related to dances and write them in the boxes given below.

monamtatihi	mpiurani	madlabi	sisodi	huib
pkuidciuh	abgra	diaandy	moargoh	kakatalhi
Classical Dances			Folk Dances	

Match the following.




Ugadi	Religious Festivals	Holi
Easter		Shivaratri
Bakrid		Ramzan
Diwali		Onam
Lohri	Seasonal and Harvesting Festivals	Baisakhi
Dussehra		Mahavir Jayanti
Buddha Purnima		Christmas
Gurpurab		Bihu

Name :
Date :

EVS
Assignment 2
Grade 4
Games We Play

Section :
Roll No :

Name the game / sport with the help of the given pictures.



Answer these following questions.

1. How are games and sports encouraged from school level?

2. What is meant by athletics?

3. Write about the game 'Kabaddi'.



Write the national game / sport of the given countries..

Russia — _____

Estonia — _____

Germany — _____

Indonesia — _____

Scotland — _____

Fill in the blanks.

1. National Sports Day in India is celebrated on the birth anniversary of _____.
2. The shortest running race in the Olympics is _____.
3. Every game has its own set of _____.
4. Number of players in Kho - Kho is _____ in each team.
5. Table tennis is also known as _____.
6. _____ is the most popular game in India.
7. Games and sports develop patience and _____ in children.
8. 'Pitcher' is the term associated with _____.

Name your favourite legends for the given sports.

Football -

Golf -

Cricket -

Shooting -

Chess -

Tennis -

Hockey -

Running -

Kabaddi -

Badminton -

Name :
Date :

EVS
Assignment 3
Grade 4
Simple Machines

Section :
Roll No :

Observe the given pictures. Write the name of the Simple Machines used in each picture.



Name the given picture. How many different simple machines are working in unison in this machine? What are they?



Answer the following questions.

1. What is a lever? What are the three components of a lever?

Give few examples of given levers..

first class lever :

second class lever :

third class lever :

Fill in the blanks.

1. In second class lever, the _____ is between the fulcrum and the effort.
2. Inclined plane is also known as a _____.
3. The screw has _____ threads on its body.
4. _____ is made up of two inclined planes, put together.
5. Windlass works on the principle of _____.
6. Door stopper wedges etc. have a _____ slope surface.
7. _____ is the most basic form of a simple machine.
8. Simple machines make our work _____.
9. Sloping hill is a natural _____.

Name :
Date :

EVS
Assignment 4
Grade 4
Our Cultural Heritage

Section :
Roll No :

Answer the following questions.

1. 'Atithi devo bhava' - what does it mean and reflect?

2. What is yoga?

3. What is culture?

Name any two national festivals.

Write about 'Ayurveda'.



Fill in the blanks.

1. Heritage is the past made _____.
2. Sushruta is known as the father of _____.
3. _____ is considered as the mother of all languages.
4. _____ is one of the greatest composers of Carnatic music.
5. _____ is the world's first university.

Unscramble the names related to dances and write them in the boxes given below.

monamtatihi	mpiurani	madlabi	sisodi	huib
pkuidciuh	abgra	diaandy	moargoh	kakatalhi
Classical Dances			Folk Dances	

Match the following.

Ugadi	Religious Festivals	Holi
Easter		Shivaratri
Bakrid		Ramzan
Diwali		Onam
Lohri	Seasonal and Harvesting Festivals	Baisakhi
Dussehra		Mahavir Jayanti
Buddha Purnima		Christmas
Gurpurab		Bihu

Name :
Date :

EVS
Assignment 5
Grade 4
Great Inventions

Section :
Roll No :

Answer the following questions.

1. What is Internet of Things (IoT)?

2. What is the working principle behind a motion picture (cinema)?

3. What is antibiotic?

Name any three inventions of Early Man.

Observe the given picture. Write about it briefly.



Fill with the appropriate answer.

1. Radio was invented by _____.
2. John Logie Baird demonstrated the first public _____.
3. Charles Babbage is considered as the _____.
4. Alexander Fleming was awarded _____ for inventing 'Penicillin'.
5. WWW stands for _____.

Match the following.

1. James Watt

2. Airplane

3. Gutenberg

4. Dynamo

5. Eastman

6. Telephone

7. Thomas Alva Edison

a. Wright brothers

b. Alexander Graham Bell

c. Electric bulb

d. Steam Engine

e. Printing press

f. Michael Faraday

g. Roll film

The development of agriculture is not helpful at all as the modern world is completely dependent on technology. Do you agree with this statement? Comment on it.

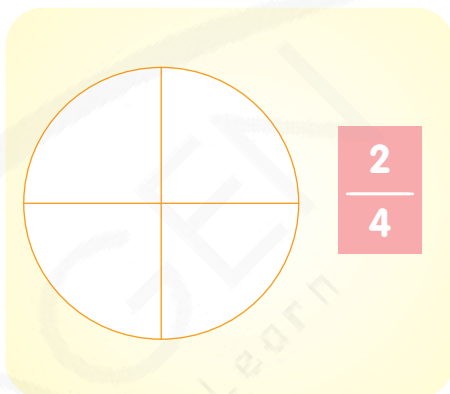
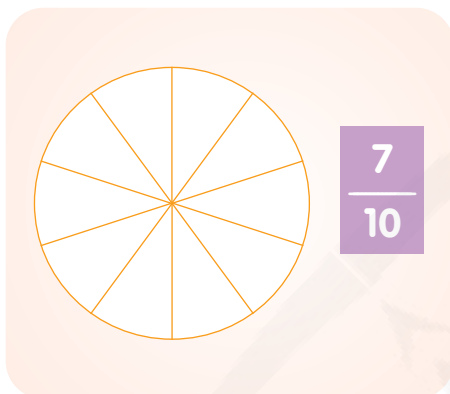
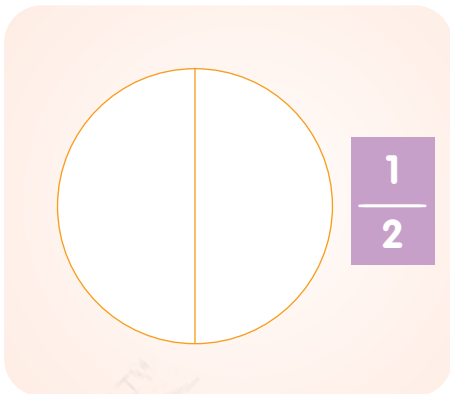
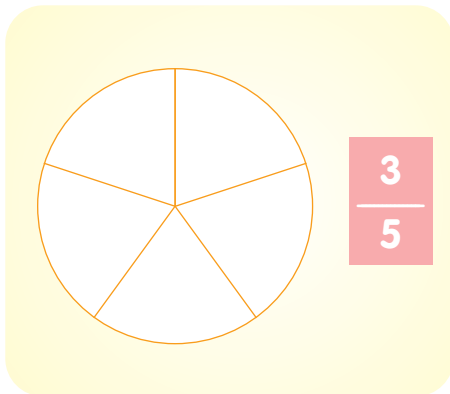
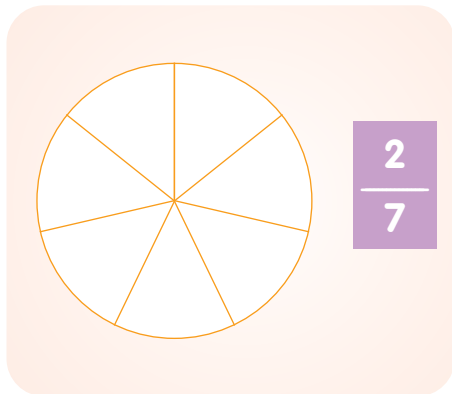
Name :

Date :

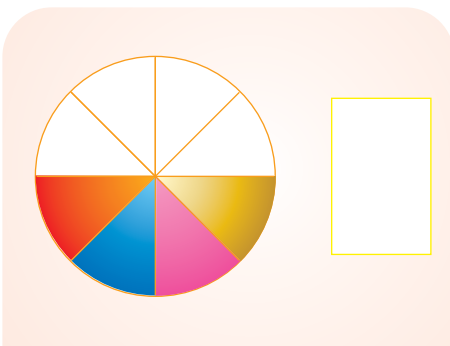
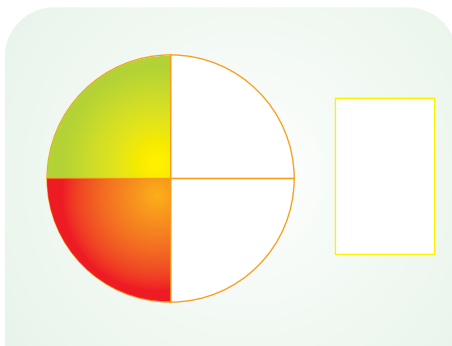
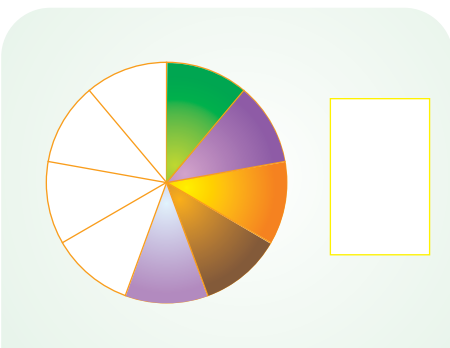
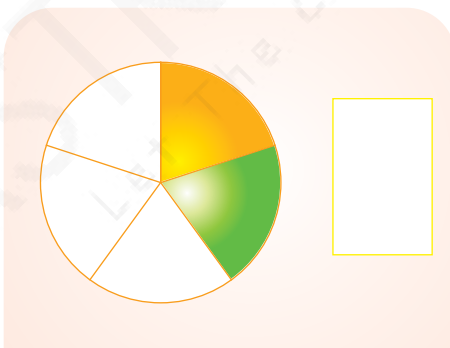
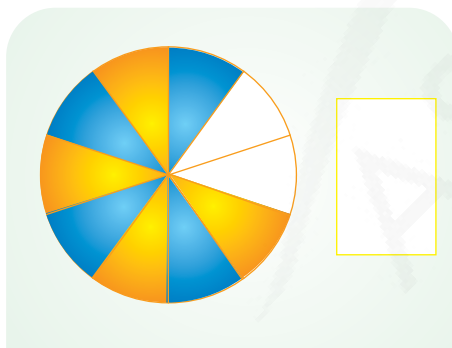
Section :

Roll No :

Shade the pictures to represent the given fractions.



Look at the given figures and write the respective fractions.



Find out the missing numbers in the given equivalent fractions.

$$\frac{2}{4} = \frac{\quad}{8}$$

$$\frac{8}{12} = \frac{4}{\quad}$$

$$\frac{3}{5} = \frac{\quad}{15}$$

$$\frac{3}{8} = \frac{6}{\quad}$$

$$\frac{9}{18} = \frac{1}{\quad}$$

Compare the given fractions and write down the appropriate symbols (<, >, =).

$$\frac{3}{10} \quad \square \quad \frac{2}{10}$$

$$\frac{2}{22} \quad \square \quad \frac{10}{22}$$

$$\frac{3}{5} \quad \square \quad \frac{1}{5}$$

$$\frac{1}{3} \quad \square \quad \frac{1}{3}$$

$$\frac{2}{15} \quad \square \quad \frac{7}{15}$$

Do the following sums.

$$\frac{5}{20} + \frac{7}{20} = \square$$

$$\frac{10}{11} + \frac{8}{11} = \square$$

$$\frac{13}{40} + \frac{17}{40} = \square$$

Answer the given word problem

Seeta drew a line that was $21/6$ inches long. If he drew a second line that is $42/6$ inches longer than the first line, what is the length of the second line?

Name :

Date :

Mathematics
Assignment 2

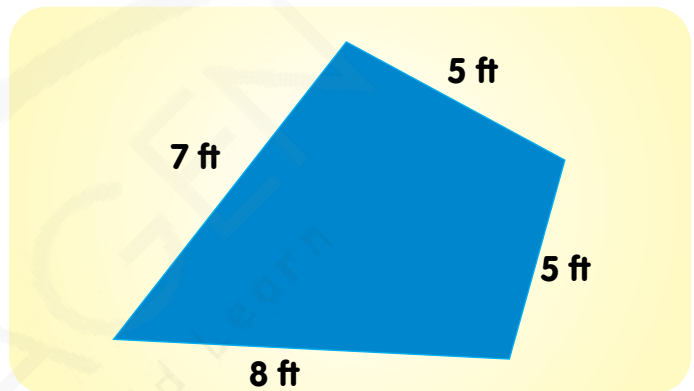
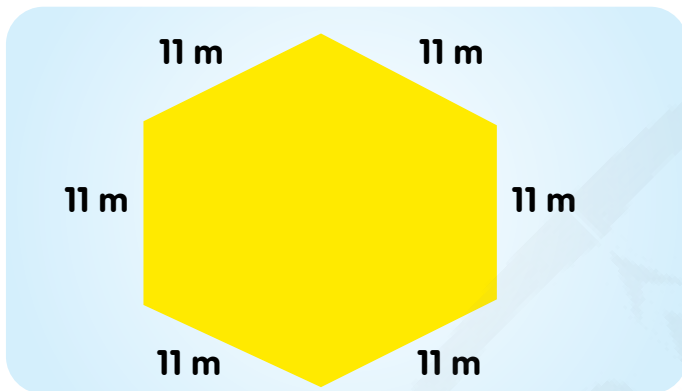
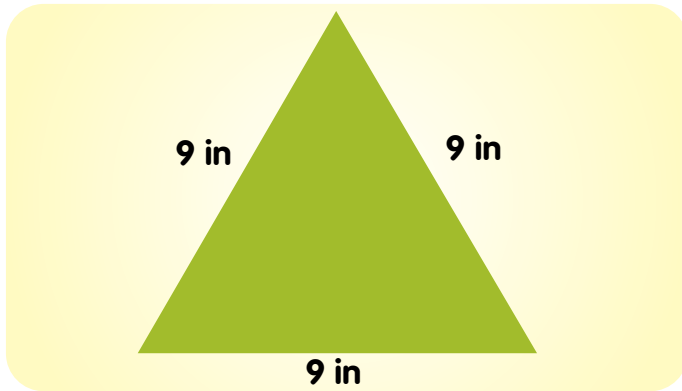
Grade 4

Section :

Roll No :

Boundaries and Areas

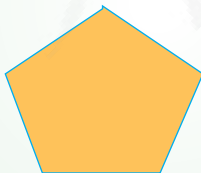
Find the **perimeter** of the given figures.



Answer the following questions.


1

The perimeter of this equal sides figure is 20cm.
how long is each side?



2

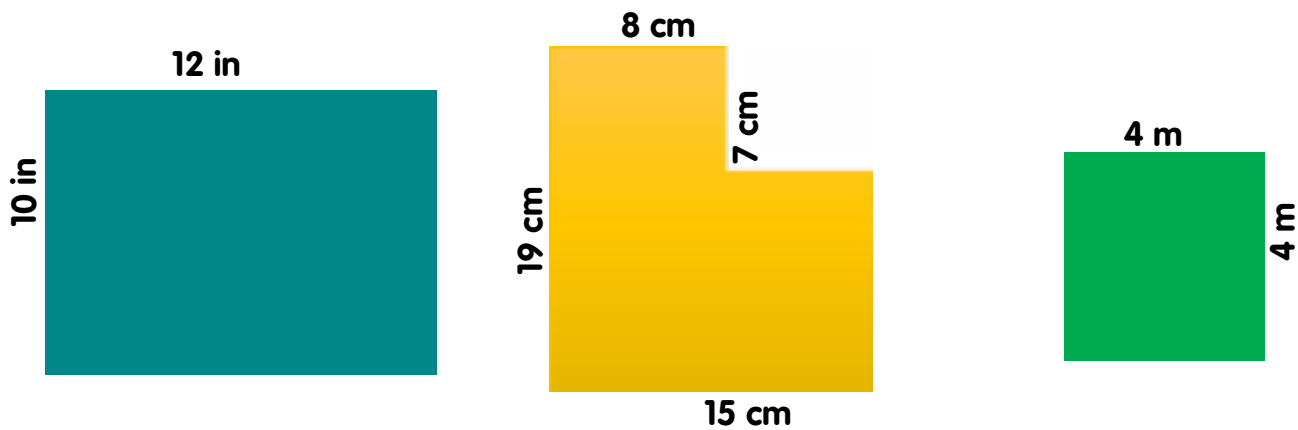
The perimeter of a square is 32 ft. how long is
each side?



3

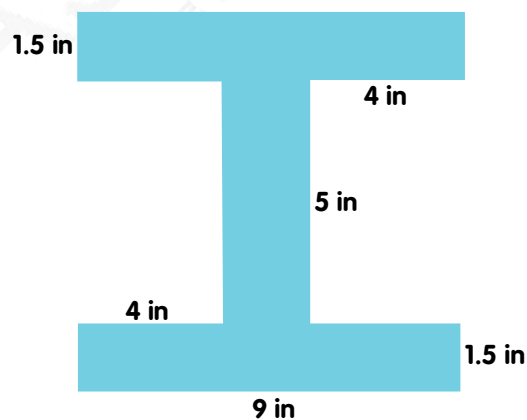
Karan is helping his father in building a fence around their rectangular garden. It is 390 m long
and 175 m wide. What is the perimeter of the garden?

Find the **area** of the given figures.



Answer the following questions.

1. Komal wants to design a quilt for her bed. The bed is 8 ft. long and 7 ft. wide. How much satin cloth should Komal buy to make a proper quilt?
2. Perimeter of a square is 48 cm. What is the measure of each side? What is its area?
3. Ruby bought a photo frame for her parents on their anniversary. The length of the frame is 30 cm and its area is 750 sq. cm. Find the width of the photo frame?
4. Find the perimeter of a triangle whose sides are 35mm, 55 mm and 65 mm.
5. Find the area and perimeter of the below given figure.




Name : _____
Date : _____


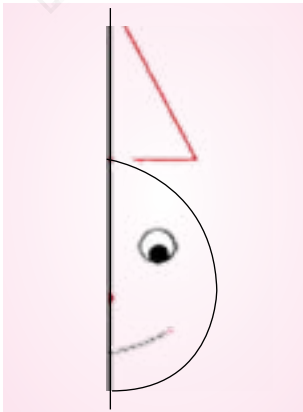
Mathematics
Assignment 3
Symmetry

Section : _____
Roll No : _____

Tick (✓) the symmetric figures and cross (x) the asymmetric figures.



Draw the mirror image for the given figures.



How many lines of symmetry are there for each figure?

8	F	B	P
X	L	4	O

Draw any two figures which have only one line of symmetry.

Draw any two asymmetrical figures.

Draw any two figures which have more than two lines of symmetry.

Name : _____
Date : _____

Mathematics
Assignment 4
Grade 4
Patterns


Section : _____
Roll No : _____

Write the next three items of each pattern.


- 1 ABBCCC ABBCCDDDD ABBCCDDDDDEEEEE _____
- 2 00300 00600 00900 _____
- 3 123abc 456def 789ghi _____
- 4 aeiou5 aeio4 _____
- 5 100Z001 1000Y0001 10000X00001 _____

Draw the next figure in the given patterns.


1




2



3



4



Complete the pattern by writing the missing numbers.

- 1 8 16 ____ 32 ____ 48 56 ____
- 2 69 77 ____ ____ 101 ____ ____ ____ 141 ____
- 3 2 8 ____ ____ ____ 38 44 ____ ____ 68
- 4 500 450 ____ ____ ____ 200 ____ 100 ____
- 5 ____ ____ 8 11 ____ ____ ____ ____

Solve the following word problems.

1. Rosy plucked red flowers from her garden and decorated her new house on the first day. She plucked yellow flowers on the second day. On third day she decorated with pink flowers. On fourth and fifth days, she plucked red and yellow flowers respectively. Which colour flowers will she pick on sixth and seventh day?

2. Jasmine is very fond of collecting leaves in a book. She collected 5 leaves of same plant in first page. She put 7 leaves of different plant in the second page and she put 9 leaves in the third page. How many leaves will she put in fourth, fifth and sixth page of the book?

3. On his first birthday, Rahul got 1 gift from his father. On his second birthday, he got 2 gifts. On his 5th birthday he got 5 gifts. How many gifts will he get on his 8th and 11th birthdays?

4. On her smart phone, Jasmine used 10 MB data in March. She used 30 MB in the month of April and 50 MB in May. If this pattern continues, how much data will she use in June and July months?

Name : _____

Date : _____

Mathematics
Assignment 5

Grade 4

Data Handling

Section : _____

Roll No : _____

Use the data from the following tally chart to answer the corresponding questions.

Name	Number of stickers collected in a month
Ananya	
Mishka	
Navya	
Rahul	
Karan	
Anmol	
Ayaan	

- How many stickers were collected by Ayaan?
- Who collected the maximum number of stickers?
- Who collected more stickers - Rahul or Mishka ?
- Who collected the least number of stickers?
- Who has fewer stickers - Ayaan or Ananya?
- How many more stickers did Navya collect than Karan?
- How many fewer stickers did Karan collect than Anmol?
- Who many stickers did Rahul collect?
- Who collected exactly 34 stickers?
- Who collected fewer stickers - Ananya or Karan?

The employees of an organization were asked to name their favourite cuisine. The table below shows the survey results. Draw a box chart for this data.

Cuisine Survey	
Italian	600
Indian	500
Thai	400
Chinese	200
Others	300

Key	
	= represents 50 employees

A shopkeeper asked his workers about the number of toys sold by them on each day of the week. The results are shown in the table. Draw a pictograph for this data.

Day of the week	Number of toys sold
Monday	8
Tuesday	16
Wednesday	24
Thursday	12
Friday	28
Saturday	20

The box chart shows the number of fishes caught by Anshul from a nearby pond on different weeks of a month. Answer the following questions by observing the box chart.



1. In which week were most fishes caught?
2. In which week did Anshul catch least number of fishes?
3. How many more fishes did Anshul catch in 3rd week than in 2nd week?
4. How many fishes did Anshul catch during the 1st week?
5. How many fewer fishes were caught in 4th week than in 3rd week?