

Name :

Date :

English
Assignment 1



Grade 1

Section :

Roll No :

Fun Day

Fill the blanks with a / an / the.



Choose the correct answers.

1. _____ Taj Mahal is my favourite monument.
a) none b) a c) an d) the
2. Go around like _____ bumblebee.
a) the b) none c) an d) a
3. Run and hop like _____ puppy.
a) an b) a c) the d) none
4. Would you please give me _____ glass of water?
a) a b) the c) none d) an
5. My friend likes to play with a _____ ball.
a) the b) a c) an d) nonne
6. _____ Lakshman is the brother of Rama.
a) A b) none **1** c) the d) an

Match the pictures that use the same article. (multiple matchings)



Unscramble and write the sentences correctly.

1. buckle shoe. your Get and up

2. European. a is He

3. The wall. is clock the on is

4. cooking is kitchen. My mother the in

5. playing Sisters dad. are their with

Name :
Date :

English
Assignment 2
Pandas
(Capital Letter, Full Stop, Question Mark, Comma, Exclamation Mark)

Section :
Roll No :

Rewrite the sentences using the correct punctuation marks.

1. the killer whale went splasssshhhh?

2. what makes a boat move,

3. on Monday, he goes for a walk with his mom

4. We live on the land along with the animals! Birds! Plants etc?

5. get out of my room?

Answer the following questions.

1. What is the colour of panda's ears?

2. Where do pandas live?

3. What is the weight of an average adult panda?

4. What do pandas love to eat?

5. What do pandas have on their body?

6. Do the pandas live in large groups?

State True or False.

1. Exclamation mark is used to express short pause. []
2. Question mark is used when a question is asked. []
3. A simple sentence starts with a full stop. []
4. Comma is used to separate the items in a list. []
5. We use capital letters in the middle of a sentence. []
6. Bamboos grow in the garden. []

Fill in the blanks.

1. A panda is a kind of _____.
2. Who are you _____.
3. _____ mark is used to express strong feelings.
4. _____ has thick fur.
5. Oh no _____

Write the missing letters of the words from the Pandas lesson.

1. p _ t _ h e _
2. m _ _ n _ a _ n
3. _ a b _ _ a _
4. _ a _ b _ _
5. p _ _ d _

Name :

Date :

English
Assignment 3

Grade 1

Section :

Roll No :

The Zoo (Describing Words)

Read the given sentences. Find out the describing words in them. Write your own sentence using that word. One is done for you.

1. Sam has long hair.

long - Sita has a long ribbon.

2. Milk in this glass is hot.

3. We have a big classroom.

4. Plants are small.

5. Shyam is weak as he has fever.

Read the given passage and answer the following questions.

There was a boy named Nani. He was a very active and clever boy who went to school on time and helped his friends in completing their homework. One day he met a doctor as he felt sick. The doctor gave him a few medicines and asked him to visit again after a week. He used to take the medicines on time and visited the doctor after a week. The doctor tested him and said that he was good. Finally, he went back to school with good health and was happy.

1. What was the name of the boy in the given story?

2. How did he help his friends?

3. When did Nani visit the doctor again?

4. How was the health of the boy by the end of the story?

5. Why did the boy meet the doctor?

6. Identify the describing words from the given story.

Answer the following questions from the poem 'The Zoo'.

1. How is the bear?
2. Who is in the cage?
3. Which animal has a big and long neck?
4. Which is your favourite animal at the zoo?
5. What did the silly monkeys do?

Match the adjectives to their opposites.

- | | |
|------------|-------------|
| 1. cruel | a. dark |
| 2. foolish | b. kind |
| 3. bright | c. thick |
| 4. careful | d. wise |
| 5. thin | e. careless |

Find the describing words in the word grid and circle them.

k	d	h	f	t	b	l	q	u
a	n	g	r	y	s	a	n	w
e	u	n	e	o	t	r	k	y
w	o	p	s	u	r	g	h	v
x	r	o	h	n	o	e	e	a
s	n	m	x	g	h	s	f	x
b	i	g	g	e	s	t	d	r
a	c	l	y	r	j	p	i	z
b	e	a	u	t	i	f	u	l

fresh
angry
weak
biggest
nice
beautiful
short
younger
round
biggest

Name :

Date :

English
Assignment 4

Grade 1

Section :

Roll No :

The Dolphin Pool (Replacement Words)

Write as many sentences as you can by picking one word from each box. One is done for you.

I		
He	am	
She	is	dancing
It	are	a cake
We	have	
You	has	
They		

I am dancing.

Answer the following questions from the "The Dolphin Pool".

1. Write the characters present in 'The Dolphin Pool'.
2. What did the dolphin jump through?
3. Who are playing with the ball?
4. What did Raff and Rose give to the dolphins?
5. Who is really very big?
6. Why did the killer whale jump up?
7. Who got wet when the killer whale went splassssshhhh?
8. Where did Raff and Rose go?

Rewrite the sentences using correct replacement words.

1. The parrot has wings.
2. Sheema has long hair.
3. Nani has a basket of vegetables and fruits.
4. The boys are jumping on the trampoline.
5. Shyam is running behind Rose.

Find out the mistakes and rewrite the sentences by using "have and has" at the correct place.
One is done for you.

1. They has a ball.

They have a ball.

2. You has black hair.

3. A circle have no sides.

4. A cow have horns on its head.

5. We has to take care of our Mother Earth.

Name :

Date :

English
Assignment 5

Grade 1

Section :

Roll No :

The Naughty Ball (Joining Words)

Answer the following questions.

1. How did the poet spend his time?
2. What did the poet kick at?
3. Where was the goal?
4. Did the poet score any goal?
5. Why was he not able to score any goal?
6. How was the hole?
7. Why did the poet fall?
8. What happened when the poet tried hard to kick the ball?
9. What was too small?
10. What was written on the wall?

Fill in the blanks with the suitable joining words ('and', 'because' and 'but').

1. I like drawing _____ colouring.
2. He tried hard to catch the ball _____ he could not catch it.
3. She didn't come to school _____ it was raining.

Complete the sentences by using a suitable joining word and a suitable continuation sentence

1. My dad has a mobile _____ My dad has a mobile and a laptop.

2. We planned a picnic _____

3. She got the first rank _____

4. My mother cooked biryani _____

5. He started early to school _____

6. Uma didn't start the test on time _____

7. The police caught the man _____

8. Sita likes to dance with Sheema _____

Unscramble the words and rewrite the sentences.

1. play I and football cricket.

2. because angry My vase. I mother broke is the

3. drink want juice to They but available. is water only

Name :

Date :

EVS
Assignment 5

Grade 1

Air Around Us

Section :

Roll No :

Answer the following questions.

1. What is wind?
2. Give examples of a few things which move with the help of air.
3. Mention any 2 properties of air.
4. How do the leaves of a tree move?
5. Who needs air to live?
6. Where is air present?
7. What helps fire to burn?

Fill in the blanks.

1. _____ has weight.
2. Air carries _____ and sound.
3. _____ helps a boat to move.
4. Air helps fire to _____.
5. We can _____ the air.

Observe the given pictures and write the words related to air in the given boxes. Take the help of the given phrases.

A

I

R

helps to fly	helps to burn	helps to live	carries smell	has weight	carries sound
<div style="background-color: #d1ecf1; padding: 5px; margin-bottom: 5px; display: flex; align-items: center;">1</div> <div style="border: 1px solid black; height: 40px; width: 100%;"></div>	<div style="background-color: #fff3cd; padding: 5px; margin-bottom: 5px; display: flex; align-items: center;">2</div> <div style="border: 1px solid black; height: 40px; width: 100%;"></div>	<div style="background-color: #d1ecf1; padding: 5px; margin-bottom: 5px; display: flex; align-items: center;">3</div> <div style="border: 1px solid black; height: 40px; width: 100%;"></div>			
<div style="background-color: #fff3cd; padding: 5px; margin-bottom: 5px; display: flex; align-items: center;">4</div> <div style="border: 1px solid black; height: 40px; width: 100%;"></div>	<div style="background-color: #d1ecf1; padding: 5px; margin-bottom: 5px; display: flex; align-items: center;">5</div> <div style="border: 1px solid black; height: 40px; width: 100%;"></div>	<div style="background-color: #fff3cd; padding: 5px; margin-bottom: 5px; display: flex; align-items: center;">6</div> <div style="border: 1px solid black; height: 40px; width: 100%;"></div>			

Write a sentence of your own using the following words.

1. wind
2. air
3. sound
4. burst
5. hearing

Name :

Date :

EVS
Assignment 2

Grade 1

Section :

Roll No :

Our Earth

Complete the passage by filling the blanks.



Hi!!!

My name is Earth. I am _____ like a ball on which you _____. I am a huge _____ ball. I am covered with _____ and _____. I am also surrounded by _____. I am your _____. I give you _____ to eat. I provide land, air and water to all the _____ things. I am also called as _____ Earth. I request you to take care and love _____, grow more _____ and keep the air and water _____.

State True or False.

1. Land, air, water, plants and animals are valuable gifts of Mother Earth. []
2. There are no animals, birds, plants etc. on the Earth. []
3. Fish live on land. []
4. At the foothills of mountains there are lands called plains. []
5. Crops are grown on the plains. []

Describe the landforms in brief.

Hills & Mountains

Rivers

Describe the given picture in simple sentences.



Name :

Date :

EVS
Assignment 3

Grade 1

Section :

Roll No :

The Sky

Look at the given pictures and set of words. Choose a word and write it below the correct picture. (stars / Earth / sunrise / crescent moon / sunset / full moon)



Fill in the blanks.

1. Our Sun is also a _____.
2. _____ looks big, as it is closer to Earth than the other stars.
3. The Sun, the _____ and the stars are nature's gift to us.
4. The Moon rotates around the _____.
5. Stars _____ in the sky at night.

Describe the given picture in your own words.



Answer the following questions.

1. What do we call the moon when it is small?
2. What do we call the time between the sunset and the sunrise?
3. Around which planet does the Moon rotate?
4. What is the Earth's satellite called?
5. How many days does it take for the Earth to go round the Sun?
6. What is called as a big ball of fire?
7. In which direction does the Sun rise?
8. Why do people love to sit in the open at night?
9. Why do stars appear small to us?
10. What does the Sun give us?

Name :

Date :

EVS
Assignment 4

Grade 1

Section :

Roll No :

Weather



Observe the given seasons and describe them in your own words.







Here are some pictures which show winter, summer and rainy seasons. Identify to which season the picture belongs to and write them in the respective boxes provided.



winter season

summer season

rainy season

Answer the following questions.

1. In which months does the winter season start and end?
2. Which season comes after the summer season?
3. Which season starts in the month of March and ends in June?
4. What is the condition of air around us called as?
5. What are the three main seasons in India?
6. Which season is it, if you are feeling thirsty?
7. When do dark clouds appear in the sky?
8. During which season do we celebrate Christmas?

Name :

Date :

EVS
Assignment 5

Grade 1

Air Around Us

Section :

Roll No :

Answer the following questions.

1. What is wind?
2. Give examples of a few things which move with the help of air.
3. Mention any 2 properties of air.
4. How do the leaves of a tree move?
5. Who needs air to live?
6. Where is air present?
7. What helps fire to burn?

Fill in the blanks.

1. _____ has weight.
2. Air carries _____ and sound.
3. _____ helps a boat to move.
4. Air helps fire to _____.
5. We can _____ the air.

Observe the given pictures and write the words related to air in the given boxes. Take the help of the given phrases.

A

I

R

helps to fly	helps to burn	helps to live	carries smell	has weight	carries sound
<div style="background-color: #d1ecf1; padding: 10px; border-radius: 10px; position: relative;"><div style="position: absolute; top: -25px; left: 50%; transform: translate(-50%, -50%); background-color: red; color: white; border-radius: 50%; width: 20px; height: 20px; display: flex; align-items: center; justify-content: center;">1</div><div style="border: 1px solid black; height: 40px; margin-top: 10px;"></div></div>	<div style="background-color: #fff3cd; padding: 10px; border-radius: 10px; position: relative;"><div style="position: absolute; top: -25px; left: 50%; transform: translate(-50%, -50%); background-color: red; color: white; border-radius: 50%; width: 20px; height: 20px; display: flex; align-items: center; justify-content: center;">2</div><div style="border: 1px solid black; height: 40px; margin-top: 10px;"></div></div>	<div style="background-color: #d1ecf1; padding: 10px; border-radius: 10px; position: relative;"><div style="position: absolute; top: -25px; left: 50%; transform: translate(-50%, -50%); background-color: red; color: white; border-radius: 50%; width: 20px; height: 20px; display: flex; align-items: center; justify-content: center;">3</div><div style="border: 1px solid black; height: 40px; margin-top: 10px;"></div></div>			
<div style="background-color: #fff3cd; padding: 10px; border-radius: 10px; position: relative;"><div style="position: absolute; top: -25px; left: 50%; transform: translate(-50%, -50%); background-color: red; color: white; border-radius: 50%; width: 20px; height: 20px; display: flex; align-items: center; justify-content: center;">4</div><div style="border: 1px solid black; height: 40px; margin-top: 10px;"></div></div>	<div style="background-color: #d1ecf1; padding: 10px; border-radius: 10px; position: relative;"><div style="position: absolute; top: -25px; left: 50%; transform: translate(-50%, -50%); background-color: red; color: white; border-radius: 50%; width: 20px; height: 20px; display: flex; align-items: center; justify-content: center;">5</div><div style="border: 1px solid black; height: 40px; margin-top: 10px;"></div></div>	<div style="background-color: #fff3cd; padding: 10px; border-radius: 10px; position: relative;"><div style="position: absolute; top: -25px; left: 50%; transform: translate(-50%, -50%); background-color: red; color: white; border-radius: 50%; width: 20px; height: 20px; display: flex; align-items: center; justify-content: center;">6</div><div style="border: 1px solid black; height: 40px; margin-top: 10px;"></div></div>			

Write a sentence of your own using the following words.

1. wind
2. air
3. sound
4. burst
5. hearing

Name : _____
Date : _____

Mathematics
Assignment 2
Grade 1
Time

Section : _____
Roll No : _____

Match the following.



a 9:00



b 6:00



c 2:00



d 4:00



e 12:00

Fill in the blanks.

1. We say _____ or _____ when we refer to time.
2. Long hands tell _____.
3. Short hand tells _____.
4. To make the short hand move once, the long hand has to move _____ times.
5. _____ hand is active and keeps moving.
6. A clock has numbers from ____ to ____ written on it.

How many times will you hear the pendulum clock ring at the given times?



Answer the following questions.

1. Sita started writing a letter at 10 a.m. and finished it after one hour. What time did she finish writing? Draw a clock to show the time.

2. You have started drawing a picture at 11 a.m. and completed it after 2 hours. What time did you finish drawing? Draw a clock to show the time.

3. You reached school at 9 a.m. You have started from your home at 8 a.m. How much time did you travel?

4. You are very hungry. You started searching for food at 11 a.m. and found something to eat after 1 hour. At what time did you find food?

Name : _____
Date : _____

Mathematics
Assignment 2
Grade 1
Time

Section : _____
Roll No : _____

Match the following.



a 9:00



b 6:00



c 2:00



d 4:00



e 12:00

Fill in the blanks.

1. We say _____ or _____ when we refer to time.
2. Long hands tell _____.
3. Short hand tells _____.
4. To make the short hand move once, the long hand has to move _____ times.
5. _____ hand is active and keeps moving.
6. A clock has numbers from ____ to ____ written on it.

How many times will you hear the pendulum clock ring at the given times?



Answer the following questions.

1. Sita started writing a letter at 10 a.m. and finished it after one hour. What time did she finish writing? Draw a clock to show the time.

2. You have started drawing a picture at 11 a.m. and completed it after 2 hours. What time did you finish drawing? Draw a clock to show the time.

3. You reached school at 9 a.m. You have started from your home at 8 a.m. How much time did you travel?

4. You are very hungry. You started searching for food at 11 a.m. and found something to eat after 1 hour. At what time did you find food?

Name : _____

Date : _____

Mathematics
Assignment 3

Grade 1

This Month This Date This Day

Section : _____

Roll No : _____

Look at the given picture. Answer the following questions.

JULY 2019						
M	T	W	T	F	S	S
1	2	3	4	5	6	7
8	9	10	11	12	13	14
15	16	17	18	19	20	21
22	23	24	25	26	27	28
29	30	31				

1. Which date comes after 11th July?
2. Which month comes before July?
3. The date after 31st July _____.
4. Independence Day falls on 15th July. Is this statement correct? If not, please correct it.
5. How many Sundays are there in the given month?

Match the following.

1

1 week

2

long hand

3

short hand

4

1st day

5

1st month

6

1 year

a

hours

b

365 days

c

7 days

d

minutes

e

January

f

Sunday

Fill in the blanks.

1. There are ____ months and ____ days in a year.
2. February has ____ days.
3. ____ comes before Friday.
4. We celebrate Christmas in the month of ____.
5. Months that have 31 days are ____.

Write True or False.

1. It is hot in the months of November, December, January and February. []
2. October has 31 days. []
3. December comes after November. []
4. Monday is the name of a month. []
5. There are 7 days in a week. []

Solve the word problems.




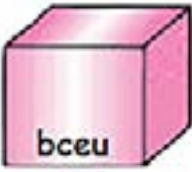





1. Teena was sent to hostel in January. She returned home after 4 months. In which month did she come back home?
2. Dev joined swimming course in the month of April. He completed his course in 3 months. In which month did he complete his course.
3. You have gone to Shimla for a vacation on 1st of October and came back home on 31st December. How many months did you stay there and what are the names of those months?

Name :
Date :

Mathematics
Assignment 4
Grade 1
Shapes Around Us

Section :
Roll No :

2D & 3D Shapes are given below with their names jumbled. Rewrite the jumbled words and place the names in the correct box.

 eglanectr	 hpsree	 rtiagnel
 bceu	 uqsrea	 redlycin
 cceilr	 noce	 bcdiou



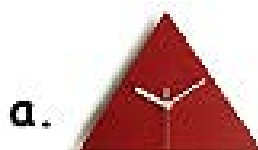



2D shapes

3D shapes

Observe each pattern and draw the next 3 shapes which come in the pattern.

Match the 2D shape to the shape similar to it and then match the shape to the correct number of sides it has. One is done for you.



A. 6

B. 0

C. 4

D. 3

E. 5

Name :

Date :

Mathematics
Assignment 5

Grade 1


Fun with Division

Section :


Roll No :

Answer the following questions.

Divide 18 hexagons into sets of 6 each. How many sets can we make?



Divide 20 pentagons into sets of 5 each. How many sets can we make?




Divide 16 stars into sets of 4 each. How many sets can we make?



Divide 15 squares into sets of 3 each. How many sets can we make?



Divide 14 circles into sets of 2 each. How many sets can we make?



Match the following sum to its correct answer.

1 $12 \div 6 =$

2 $21 \div 3 =$

3 $32 \div 2 =$

4 $10 \div 2 =$

5 $40 \div 4 =$

a 5

b 10

c 2

d 7

e 16

Do the given sums.

1 $16 \div 4 =$

2 $22 \div 2 =$

3 $14 \div 7 =$

4 $36 \div 6 =$

5 $16 \div 8 =$

Complete the given word problems.

1. There are 18 mangoes and 9 children. If you distribute them equally among the 9 children, how many mangoes will each child get?
2. 50 lemons are packed into 5 boxes. How many lemons are packed in each box?
3. There are 48 students in a class. They are going to play a game. They need to divide themselves into 3 teams. How many students will be there in each team?
4. You have 2 sets of books. The total number of books in both the sets is 16. How many books does each set have?